



Cambridge International AS & A Level

GEOGRAPHY**9696/41**

Paper 4 Advanced Human Geography Options


October/November 2020

INSERT

1 hour 30 minutes

INFORMATION

- This insert contains all the resources referred to in the questions.
- You may annotate this insert and use the blank spaces for planning. **Do not write your answers** on the insert.



This document has **8** pages. Blank pages are indicated.

Fig. 1.1 for Question 1

A pastoral farm in Iran, an MIC in the Middle East



Fig. 4.1 for Question 4

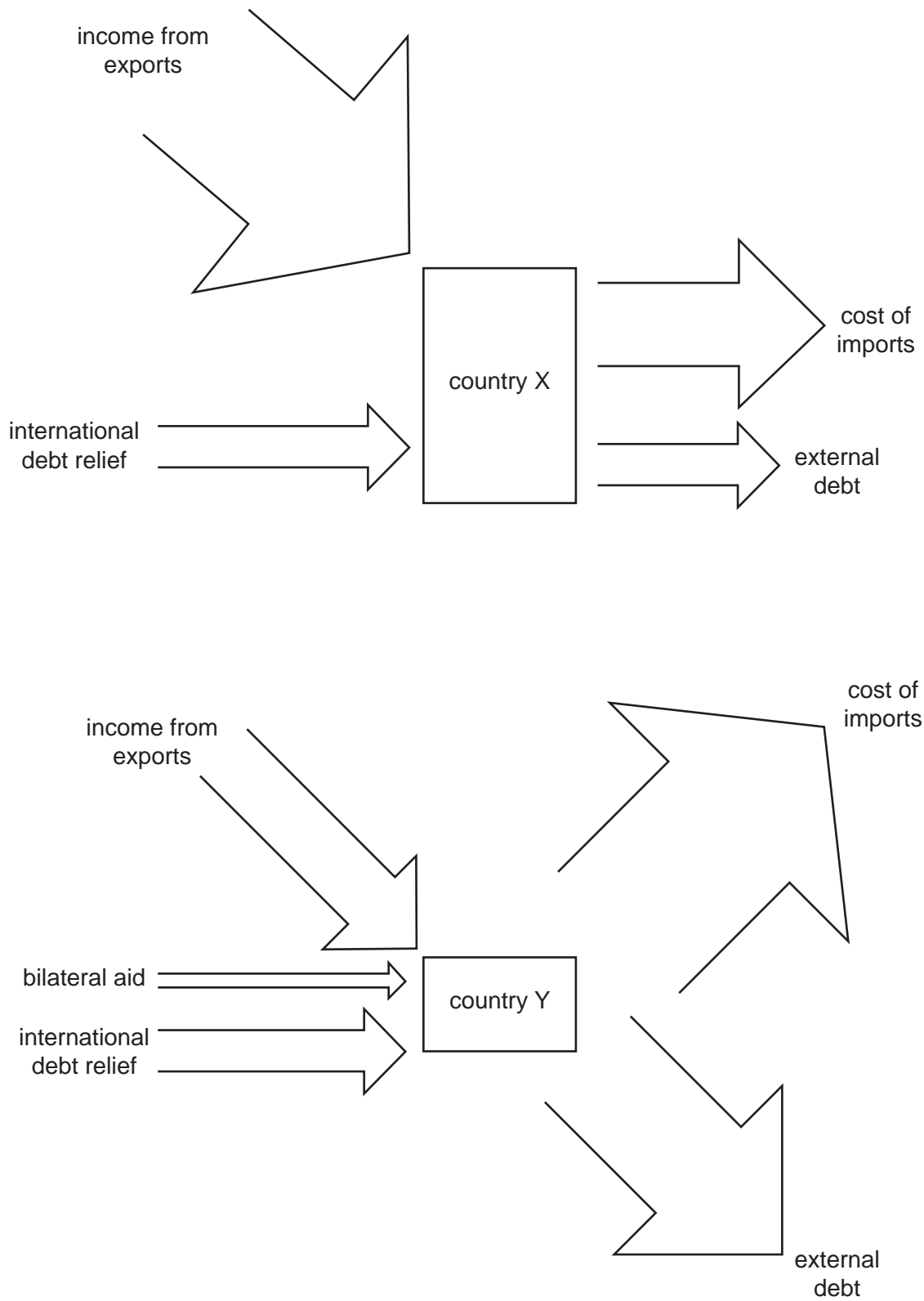
Energy resources in the Arctic

**Key**

- existing oil and gas field
- area with at least 50% chance of large oil and gas reserves
- extent of sea ice in 2016

Fig. 7.1 for Question 7

Simplified diagrams of flows of capital for countries X and Y

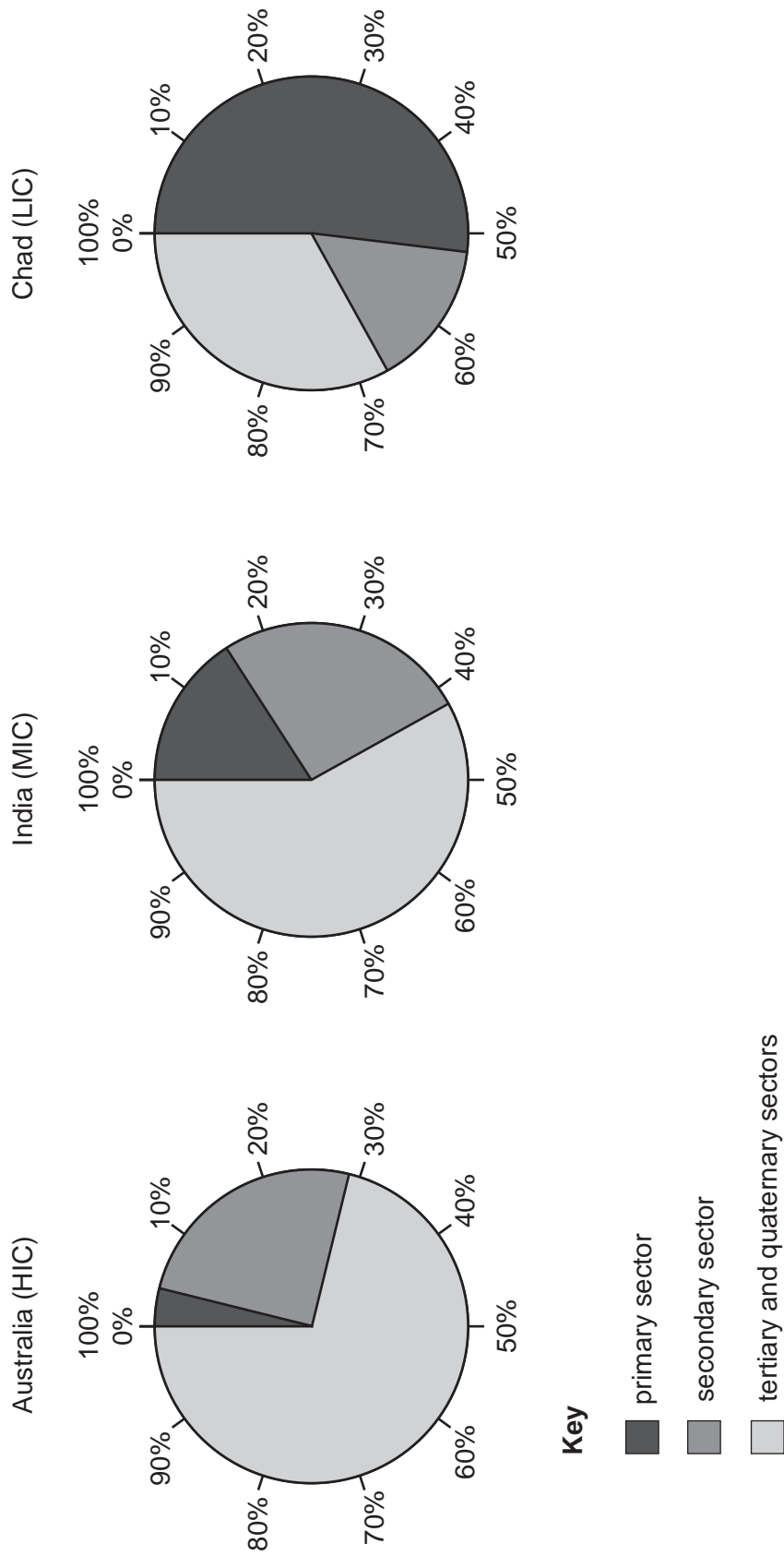


The size of the arrows shows the relative size of the flows of capital.

The size of the boxes shows the relative size of the economy.

Fig. 10.1 for Question 10

Economic structures of Australia, India and Chad, 2017



BLANK PAGE

BLANK PAGE

BLANK PAGE

The boundaries and names shown, the designations used and the presentation of material on the maps contained in this question paper/insert do not imply official endorsement or acceptance by Cambridge Assessment International Education concerning the legal status of any country, territory, or area or any of its authorities, or of the delimitation of its frontiers or boundaries.

Permission to reproduce items where third-party owned material protected by copyright is included has been sought and cleared where possible. Every reasonable effort has been made by the publisher (UCLES) to trace copyright holders, but if any items requiring clearance have unwittingly been included, the publisher will be pleased to make amends at the earliest possible opportunity.

To avoid the issue of disclosure of answer-related information to candidates, all copyright acknowledgements are reproduced online in the Cambridge Assessment International Education Copyright Acknowledgements Booklet. This is produced for each series of examinations and is freely available to download at www.cambridgeinternational.org after the live examination series.

Cambridge Assessment International Education is part of the Cambridge Assessment Group. Cambridge Assessment is the brand name of the University of Cambridge Local Examinations Syndicate (UCLES), which itself is a department of the University of Cambridge.